

Table of Contents

Introduction	3
McREL Compendium of Content Standards and Skills Index	4
General Test-Taking Strategies	6
Reducing Test Anxiety	7
A Note to the Test Givers	7
Strategies for Reducing Test Anxiety	8
Practice Listening	10
Practice Guessing	16
Sample Test	20
Language Arts Tests	22
Letter Recognition—Beginning Sounds—Rhyming Words—Ending Sounds—Sight Words— Spelling—Beginning Blends—Ending Blends—Beginning Digraphs—Vocabulary—Contractions— Word Endings—Middle Sounds—Syllabication—Letter Substitution—Compound Words—Short and Long Vowels—Parts of Speech—Reading Comprehension	
Math Tests	73
Numbers and Counting—Comparing and Ordering Numbers—Addition—Subtraction—Time— Patterns—Odds, Evens, and Doubles—Shapes—Symmetry and Transformations—Money—Problem Solving—Fractions—Reading Graphs	
Science Tests	112
Seasons—Rocks and Soil—The Sun—Animal Characteristics—Plants—Objects, Forces, and Motion—Senses	
Social Studies Tests	128
Calendar Skills—Map Skills—Neighborhood and Community—Work—Symbols, Holidays, and Celebrations	
Parent Handouts	140
Reading—Math—Writing	

Ending Sounds

Reproduce and pass out page 31 to students.

Teacher Script

Now it's time to practice choosing the ending sounds of letters in words. I will ask you a question about each row. You must listen carefully. I will not stop to discuss the answers, but I will go slowly enough for you to complete each question. Remember to make good guesses like we have been practicing. Fill in the circle under the letter for each answer.

Put your finger on number 1. Here is a picture. Which of the letters stands for the ending sound?

Put your finger on number 2. Here is a picture. Which of the letters stands for the ending sound?

Put your finger on number 3. Here is a picture. Which of the letters stands for the ending sound?

Put your finger on number 4. Here is a picture. Which of the letters stands for the ending sound?

Put your finger on number 5. Here is a picture. Which of the letters stands for the ending sound?

Put your finger on number 6. Here is a picture. Which of the letters stands for the ending sound?

Now we stop. I'll know you're finished when your pencil is down and you are sitting quietly.

Answer Key

1. k
2. r
3. t
4. g
5. s
6. n

Ending Sounds

1.



k

q

f

2.




c

r

d

3.




b

s

t

4.




g

j

d

5.



c

s

b

6.



n

m

p



Reproduce and pass out page 80 to students.

Teacher Script

Now we are going to do addition. You are going to find the sum to each problem. Then you will fill in the circle next to the right answer. I will not stop to discuss the problems, but I will go slowly enough for you to complete each question.

Put your finger on number 1. Find the sum. Fill in the answer circle.

Put your finger on number 2. Find the sum. Fill in the answer circle.

Put your finger on number 3. Find the sum. Fill in the answer circle.

Put your finger on number 4. Find the sum. Fill in the answer circle.

Put your finger on number 5. Find the sum. Fill in the answer circle.

Put your finger on number 6. Find the sum. Fill in the answer circle.

Put your finger on number 7. Find the sum. Fill in the answer circle.

Put your finger on number 8. Find the sum. Fill in the answer circle.

Now we stop. When you're finished, put your pencil down and sit quietly.

Answer Key

1. 55
2. 97
3. 75
4. 79
5. 96
6. 49
7. 25
8. 89

Addition 1

1.

$$\begin{array}{r} 43 \\ + 12 \\ \hline \end{array}$$

- 55
 54
 57

5.

$$\begin{array}{r} 66 \\ + 30 \\ \hline \end{array}$$

- 90
 91
 96

2.

$$\begin{array}{r} 83 \\ + 14 \\ \hline \end{array}$$

- 79
 97
 87

6.

$$\begin{array}{r} 35 \\ + 14 \\ \hline \end{array}$$

- 94
 49
 57

3.

$$\begin{array}{r} 51 \\ + 24 \\ \hline \end{array}$$

- 57
 63
 75

7.

$$\begin{array}{r} 14 \\ + 11 \\ \hline \end{array}$$

- 25
 52
 24

4.

$$\begin{array}{r} 47 \\ + 32 \\ \hline \end{array}$$

- 79
 97
 83

8.

$$\begin{array}{r} 30 \\ + 59 \\ \hline \end{array}$$

- 94
 89
 17

