

Change, Please!

Megan has \$1.00.

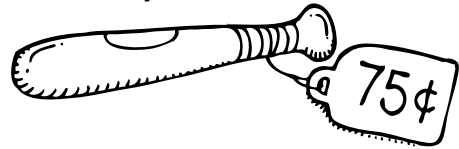


1 If she buys a




how much change will she get? _____

2 If she buys a




how much change will she get? _____

3 If she buys a




how much change will she get? _____

4 If she buys a



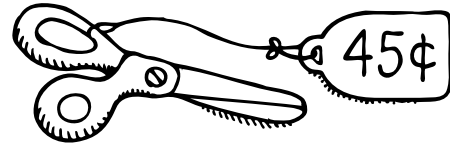
how much change will she get? _____

5 If she buys a




how much change will she get? _____

6 If she buys



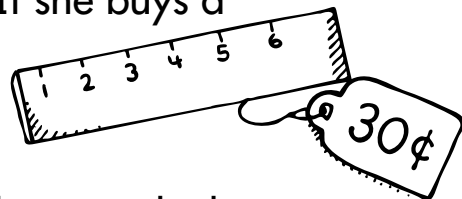
how much change will she get? _____

7 If she buys a



how much change will she get? _____

8 If she buys a



how much change will she get? _____