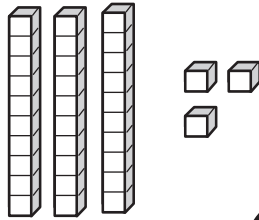


PLACE VALUE

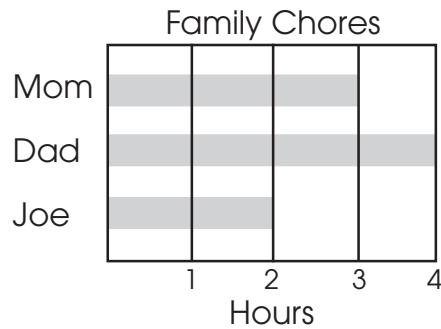
Add 2 tens and 4 ones. What is the new number?



31

GRAPHING, PROBABILITY, & STATISTICS

Who spent only 2 hours on chores?



32

MONEY


Take away 7¢. How much is left?



33

MEASUREMENT

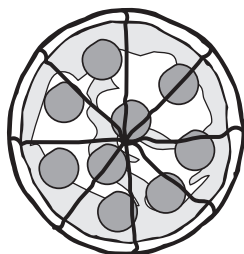
What is the total length of the ants?



34

FRACTIONS


How many slices are there in half the pizza?



35

BONUS BUILDER #7

Each basket holds 5 apples. How many more baskets are needed?



PROBLEM SOLVING

PATTERNS & RELATIONSHIPS

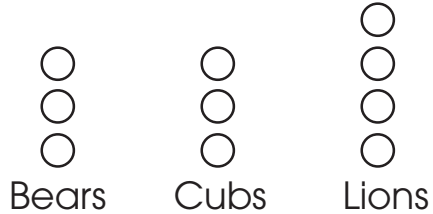
Finish this pattern.



36

GRAPHING, PROBABILITY, & STATISTICS

If each \bigcirc = 3 wins, how many games did the Cubs win in all?



37

PROBLEM SOLVING

There are 16 kids at the zoo. Seven of them are boys. How many are girls?

38

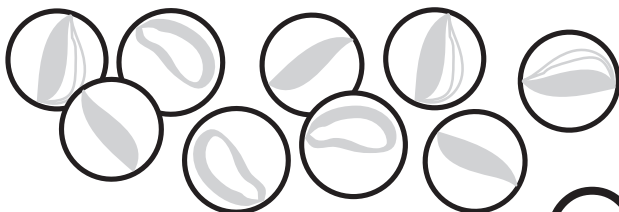
MONEY

Draw 3 ways to make 10¢ without using a dime.

39

COMPUTATION

Count the marbles. If you lose 2 and buy 3 more, how many will you have?



40

BONUS BUILDER #8

Write the number for each word.

ten
twelve
eight
sixteen

NUMERATION